
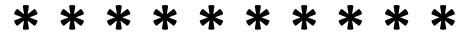
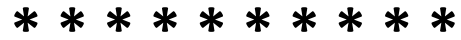


Dopo aver indicato per ogni schieramento le righe e le colonne, scrivi le due moltiplicazioni possibili.




..... X ..... = .....

..... X ..... = .....




..... X ..... = .....

..... X ..... = .....



..... X ..... = .....

..... X ..... = .....



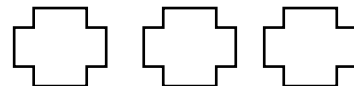
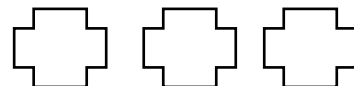
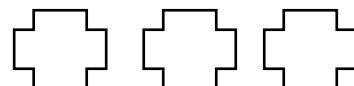
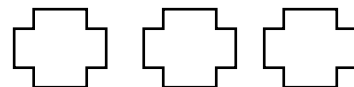
..... X ..... = .....

..... X ..... = .....



..... X ..... = .....

..... X ..... = .....



..... X ..... = .....

..... X ..... = .....